

Surname	Centre Number	Candidate Number
First name(s)		0



GCSE

3310U30-1



TUESDAY, 2 NOVEMBER 2021 – MORNING

MATHEMATICS – NUMERACY UNIT 1: NON-CALCULATOR INTERMEDIATE TIER

1 hour 35 minutes

ADDITIONAL MATERIALS

The use of a calculator is not permitted in this examination.
A ruler, a protractor and a pair of compasses may be required.

INSTRUCTIONS TO CANDIDATES

Use black ink or black ball-point pen. Do not use gel pen or correction fluid.

You may use a pencil for graphs and diagrams only.

Write your name, centre number and candidate number in the spaces at the top of this page.

Answer **all** the questions in the spaces provided.

If you run out of space, use the additional page at the back of the booklet. Question numbers must be given for the work written on the additional page.

Take π as 3.14.

INFORMATION FOR CANDIDATES

You should give details of your method of solution when appropriate.

Unless stated, diagrams are not drawn to scale.

Scale drawing solutions will not be acceptable where you are asked to calculate.

The number of marks is given in brackets at the end of each question or part-question.

In question 3(a), the assessment will take into account the quality of your linguistic and mathematical organisation, communication and accuracy in writing.

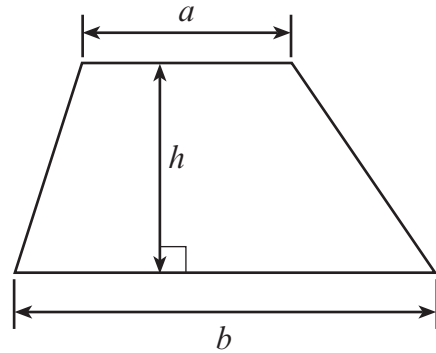
For Examiner's use only		
Question	Maximum Mark	Mark Awarded
1.	3	
2.	6	
3.	8	
4.	6	
5.	7	
6.	8	
7.	9	
8.	7	
9.	4	
10.	12	
Total	70	



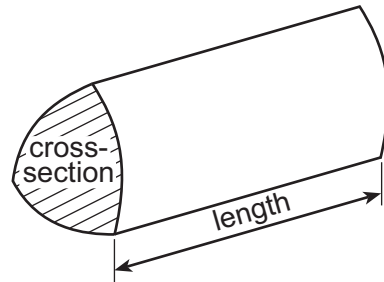
NOV213310U30101

Formula List – Intermediate Tier

Area of trapezium = $\frac{1}{2}(a + b)h$

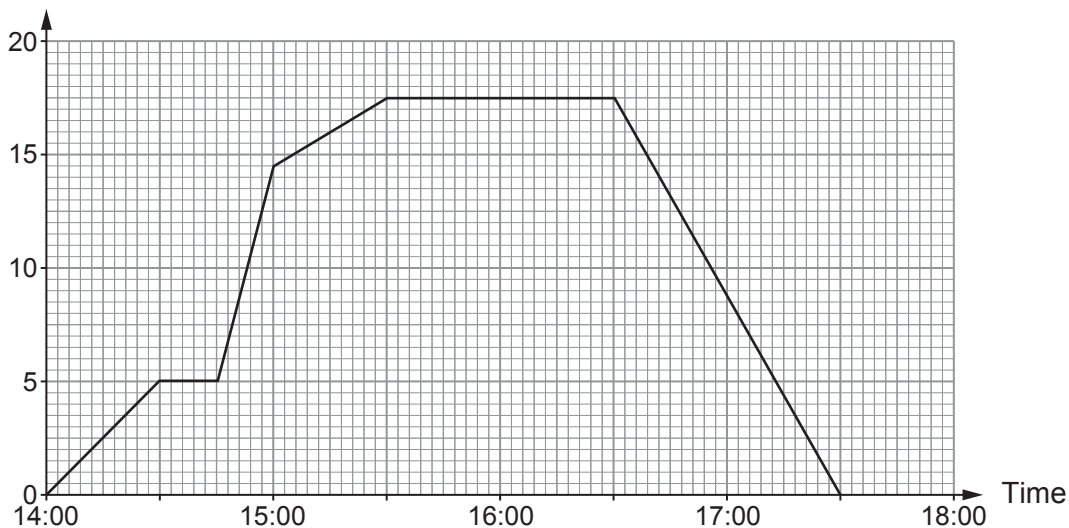


Volume of prism = area of cross-section \times length



1. Dean went to the gym yesterday afternoon.
The graph shows the distance Dean was from home during yesterday afternoon.

Distance from home (km)



- (a) How far away from home was Dean at 15:15?
Circle your answer.

[1]

15.5 km 15 km 16.5 km 16 km 17 km

- (b) At what time did Dean arrive back home?
Circle your answer.

[1]

5:30 p.m. 5:30 a.m. 5:15 p.m. 5:10 p.m. 5:00 a.m.

- (c) Circle the term below that best completes the statement.

[1]

"Looking at the travel graph, it is that Dean stopped for more than ten minutes on the way to the gym."

very unlikely

unlikely

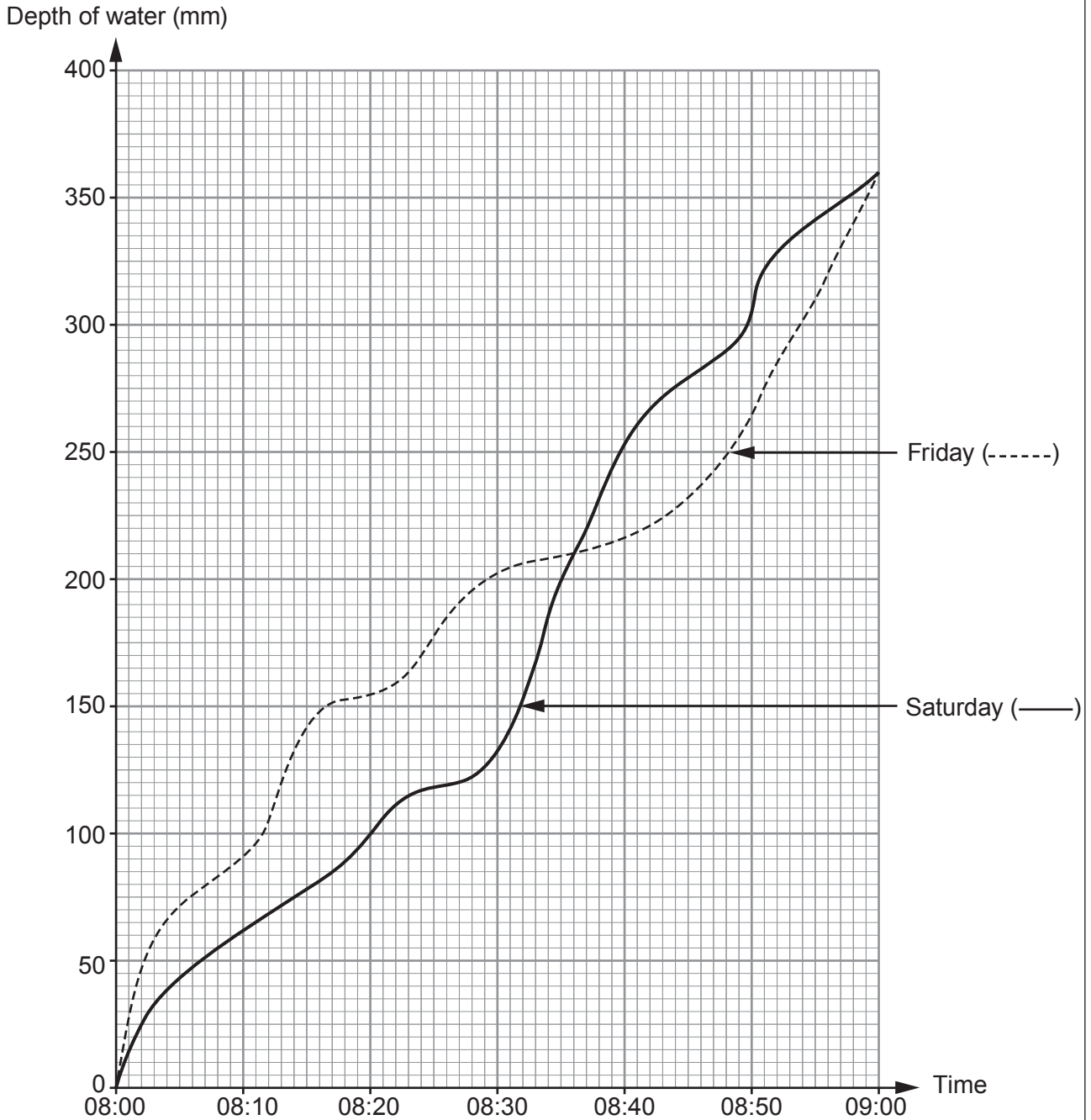
impossible

an even chance

very likely



2. A water tank is filled every morning.
The graph below shows the depth of water in the tank between 8:00 a.m. and 9:00 a.m. on Friday and Saturday.



- (a) What was the difference between the depth of water on Friday and on Saturday at 8:20 a.m.?

[2]



(b) On both days, the tank filled with water to a depth of 360 mm. On which day did this happen more quickly?

Friday Saturday The same for both days

You must give a reason for your answer. [1]

.....
.....
.....

(c) Consider the time interval between 8:10 a.m. and 8:50 a.m. At what time was the depth of the water in the tank the same on both Friday and Saturday? [1]

.....
.....
.....

(d) On which day did the water tank fill more quickly between 8:30 a.m. and 8:40 a.m.?

Friday Saturday Can't tell

You must give a reason for your answer. [1]

.....
.....
.....

(e) The tank can hold water to a depth of 400 mm. On Saturday, at what time was the water in the tank **half** this depth? [1]

- 8:28 a.m. 8:20 a.m. 8:35 a.m. 8:12 a.m. 8:30 a.m.


.....
.....

3310U301
05



3. (a) *In this part of the question, you will be assessed on the quality of your organisation, communication and accuracy in writing.*

The following advertisement appeared in the *Draig Newsletter*.

<p>Mr Chen's guitar lessons.</p> <p>A single lesson costs £23.</p> <p>Pay in advance for 5 lessons and get 15% off the cost of these 5 lessons.</p>	
--	--

Rowena has a guitar lesson with Mr Chen.
She then decides to pay in advance for a further 5 lessons.

How much does Rowena pay in total for these 6 guitar lessons? [4 + 2 OCW]

.....

.....

.....

.....

.....

.....

.....

.....

.....

.....

.....

.....

.....

.....

.....

.....

.....

.....

.....

.....

.....

.....

.....

.....



(b) Dafydd wants to learn to play the saxophone.

Saxophone lessons will cost him a total of £300.
He needs to pay a deposit of £18 to book the lessons.



What percentage of the total cost of the lessons is the deposit?

[2]

.....

.....

.....

.....

.....

.....

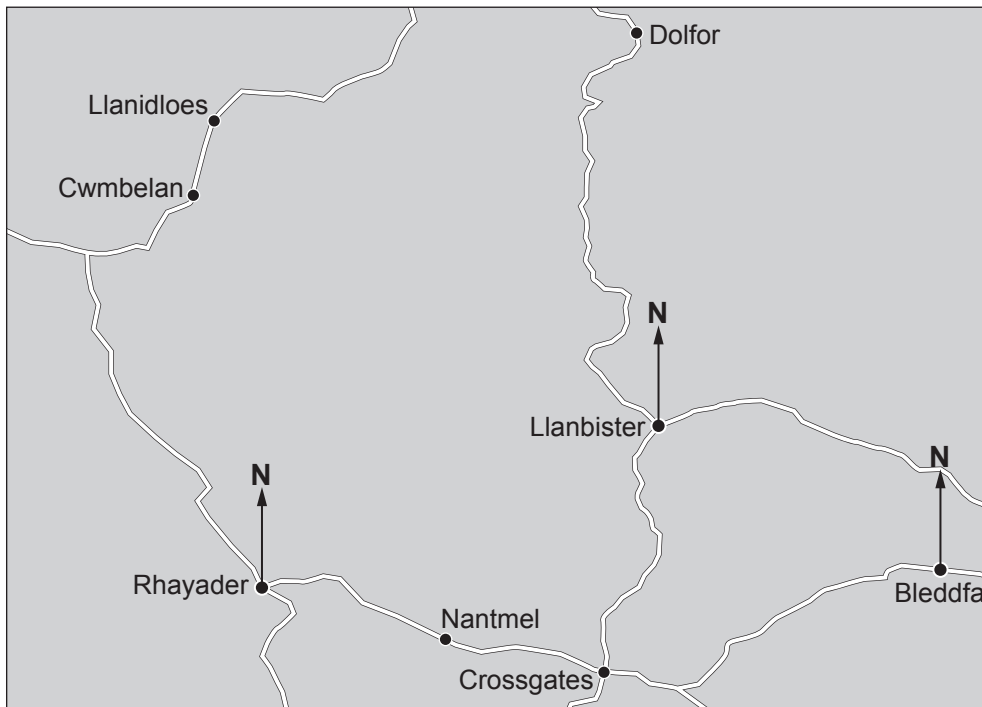
.....

.....

3310U301
07



4. Use this section of a map of Wales to answer this question.
The map is drawn to scale.



(a) Complete each of the following statements.

(i) 'The bearing of Llanbister from Rhayader is°.' [1]

(ii) 'The bearing of Bleddfa from Llanbister is°.' [1]

(b) Cwmbelan is 2 miles from Llanidloes.

Sioned travelled from Rhayader to Crossgates in 30 minutes.

Calculate her approximate average speed.

Give your answer in miles per hour (mph).

You must show all your working.

[4]

.....

.....

.....

.....

.....

.....

.....



BLANK PAGE

**PLEASE DO NOT WRITE
ON THIS PAGE**

3310U301
09



5. Three different stores sell bananas.

Store	Price of bananas
<i>FruitCo</i>	12 bananas for £1
<i>Quick Fruit</i>	4p per 50g
<i>Bach Market</i>	85 pence per kg



You can assume that the mass of a banana in each of the stores is 100g.

Sid needs to buy 24 bananas.

Calculate how much Sid would pay in each of the stores.
In which store will he be able to get 24 bananas for the least amount of money?
You must show all your working.

[7]

.....

.....

.....

.....

.....

.....

.....

.....

.....

.....

.....

.....

.....

.....

.....

.....

.....

.....

.....

.....

.....

.....

Examiner
only

A large rectangular area containing 20 horizontal dotted lines, intended for writing or marking.



6.



The skeleton of a dinosaur was found in Wyoming, USA, in 2008. This skeleton is now on display in a shopping mall in Dubai.

Here are some facts about this skeleton.

- It was transported 7500 miles from Wyoming to Dubai.
- It is over 155 million years old.
- It is 80 feet long and 25 feet tall.

(a) How far was the skeleton transported? Give your answer in kilometres.

[2]

.....

.....

.....

.....

.....

..... km

(b)

Remember: 1 foot (ft) \approx 30 cm
--

Calculate how long and how tall the skeleton is in **metres**.

[4]

.....

.....

.....

.....

.....

.....

.....

.....

.....

.....

The skeleton is m long and m tall



(c)



Assume:

- the skeleton had been transported complete in one crate,
- the crate was in the shape of a cuboid.

Which of the following would be the best estimate of the volume of the crate?
Circle your answer. [1]

20 000 ft³20 000 ft²2 000 ft²200 000 ft³2 000 ft³

.....

.....

.....

.....

.....

(d) Which of the following is 155 million written in standard form?
Circle your answer. [1]

 15.5×10^7 1.55×10^4 1.55×10^6 155×10^6 1.55×10^8

.....

.....

.....



7. (a) Penystrad is a mountain village.
The daily rainfall for April 2021 is given in the table below.

Daily rainfall, r (mm)	Number of days
$0 \leq r < 6$	15
$6 \leq r < 12$	11
$12 \leq r < 18$	3
$18 \leq r < 24$	1

- (i) Wesley asks,

During April 2021, on how many days did it **not** rain in Penystrad?

Explain why it is not possible to answer Wesley's question using the table shown above. [1]

.....

.....

.....

.....

- (ii) Calculate an estimate for the mean daily rainfall for the 30 days of April. [4]

.....

.....

.....

.....

.....

.....

.....

.....

.....

.....



(b) Glanwen is a different village.

During the first 25 days of April in Glanwen, the mean daily rainfall was 4.4 mm.

It did not rain in Glanwen during the last 5 days of April.

Calculate the mean daily rainfall in Glanwen for April.

Give your answer correct to 3 significant figures.

[4]

.....

.....

.....

.....

.....

.....

.....

.....

.....

.....



8. Sara makes and sells handmade chocolates.

- (a) She makes boxes for her chocolates in the shape of a tetrahedron.
Sara uses thin card to make each box.
The length of each edge of the box is 5 cm.

What is the total length of the edges of one box?
Circle your answer.

[1]

15 cm 30 cm 40 cm 45 cm 60 cm

.....

.....

- (b) Each box contains 4 chocolates.
Each chocolate costs Sara 7p to make.
She can make 25 boxes from thin card for 50p.
Sara makes just enough chocolates and boxes to sell 150 boxes of chocolates.

Sara makes 20% profit from selling all 150 boxes of chocolates.
How much profit does Sara make?
You must show all your working.

[6]

.....

.....

.....

.....

.....

.....

.....

.....

.....

.....

.....

.....

.....

.....

.....

.....

.....

.....

.....

.....

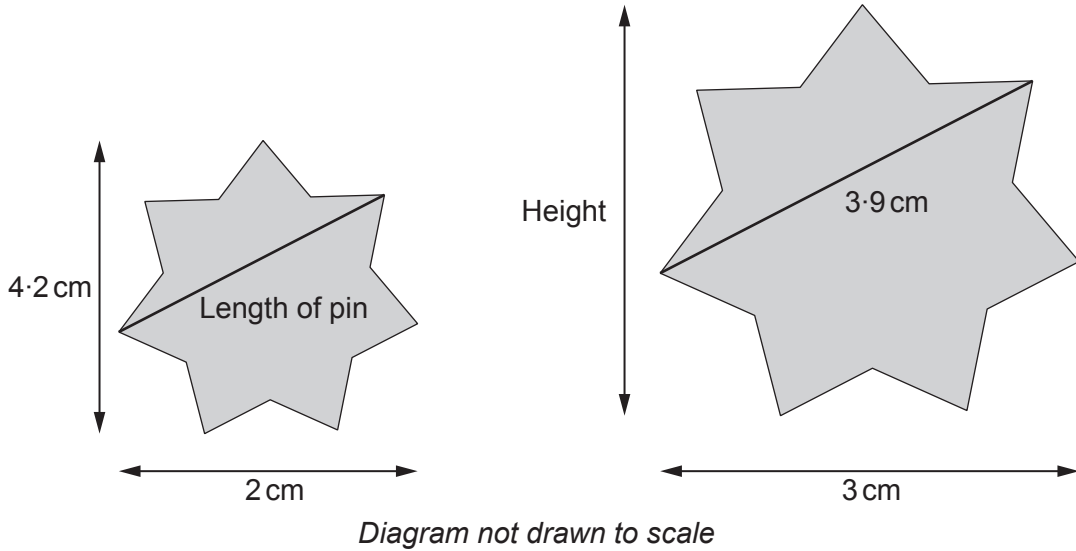
.....

.....

.....



9. A fast food restaurant has staff name badges in the shape of a star. Each badge has a pin across the back, as shown in the diagram. Members of staff choose the size of badge they want to wear. The badges are mathematically similar.



The length of the pin on the larger badge is 3.9 cm.

Calculate the height of the larger badge and the length of the pin on the smaller badge. [4]

.....

.....

.....

.....

.....

.....

.....

.....

.....

.....

Height of the larger badge cm
 Length of the pin on the smaller badge cm



10. Bethan works as an office manager at a medical centre.

Last Monday, 60 patients each had an appointment with a doctor.
Bethan recorded how long each patient's appointment lasted.
Her results are given in the table below.

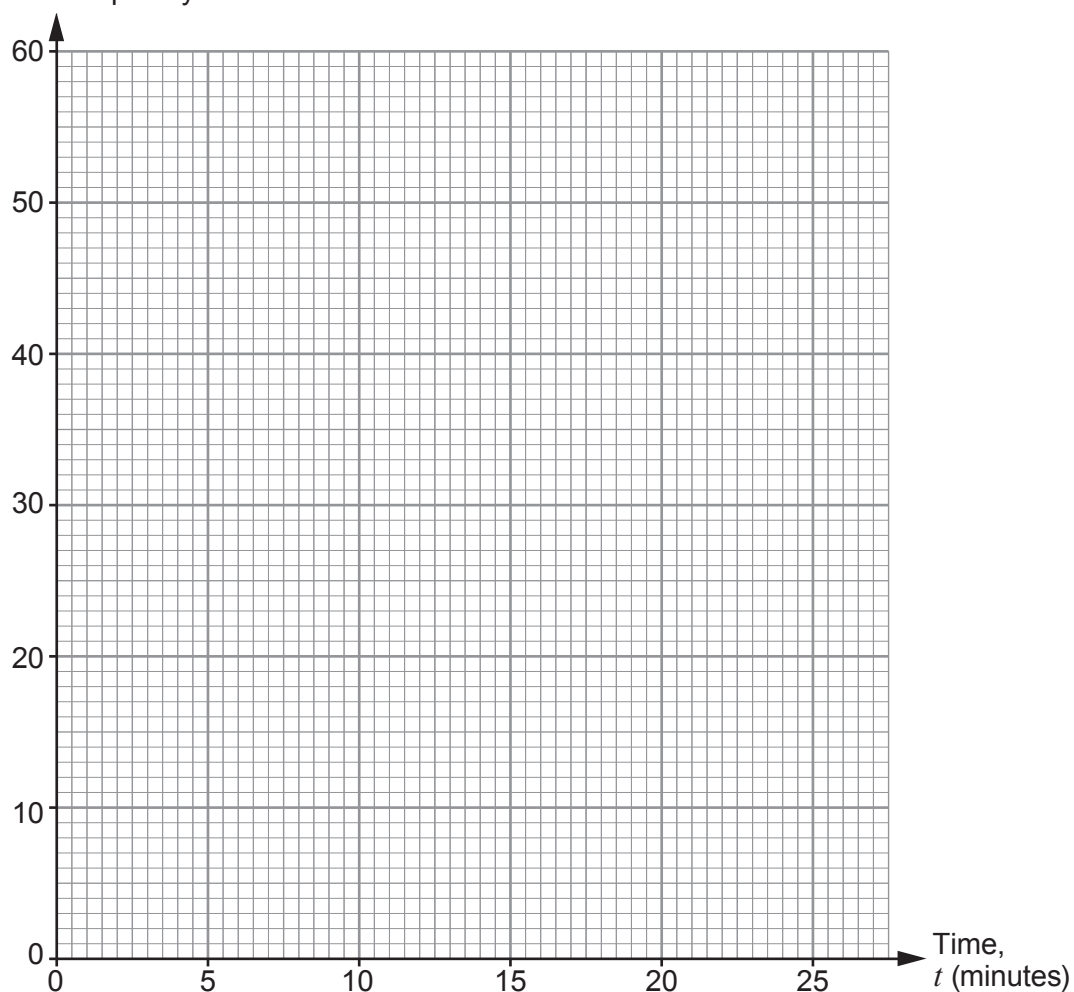
Length of time, t (minutes)	$0 < t \leq 4$	$4 < t \leq 8$	$8 < t \leq 12$	$12 < t \leq 16$	$16 < t \leq 20$	$20 < t \leq 24$
Number of patients	4	24	18	6	2	6

(a) Complete the following cumulative frequency table. [1]

Time, t (minutes)	$t \leq 0$	$t \leq 4$	$t \leq 8$	$t \leq 12$	$t \leq 16$	$t \leq 20$	$t \leq 24$
Cumulative frequency	0	4	28				60

(b) On the graph paper below, draw a cumulative frequency diagram to show this information. [2]

Cumulative frequency



- (c) Each patient is given 10 minutes for their appointment.
Use your graph to give the best estimate for the number of appointments that lasted longer than 10 minutes.
Give your answer correct to the nearest whole number of appointments. [2]

.....

.....

- (d) Of the patients seen last Monday, what percentage spent longer than 20 minutes with the doctor? [2]

.....

.....

- (e) The median length of the appointments last Tuesday was 11.5 minutes.
How much shorter was the median length of the appointments on Monday?
Give your answer correct to the nearest minute. [2]

.....

.....

.....

- (f) Bethan is considering changing the time given for each patient's appointment to 12 minutes.
She would set a target of 80% of patient appointments taking less than or equal to 12 minutes.
Would this target have been met last Monday?
You must show all your working. [3]

.....

.....

.....

.....

END OF PAPER



