

Monday 29 November 2021 – Morning

**GCSE (9–1) Combined Science (Chemistry) A
(Gateway Science)**

J250/04 Paper 4 (Foundation Tier)

Time allowed: 1 hour 10 minutes

You must have:

- a ruler (cm/mm)
- the Data Sheet for GCSE (9–1) Combined Science (Chemistry) A (inside this document)

You can use:

- a scientific or graphical calculator
- an HB pencil



Please write clearly in black ink. **Do not write in the barcodes.**

Centre number

--	--	--	--	--

Candidate number

--	--	--	--

First name(s)

Last name

INSTRUCTIONS

- Use black ink. You can use an HB pencil, but only for graphs and diagrams.
- Write your answer to each question in the space provided. If you need extra space use the lined pages at the end of this booklet. The question numbers must be clearly shown.
- Answer **all** the questions.
- Where appropriate, your answer should be supported with working. Marks might be given for using a correct method, even if your answer is wrong.

INFORMATION

- The total mark for this paper is **60**.
- The marks for each question are shown in brackets [].
- Quality of extended response will be assessed in questions marked with an asterisk (*).
- This document has **24** pages.

ADVICE

- Read each question carefully before you start your answer.

2
SECTION A

Answer **all** the questions.

You should spend a maximum of 20 minutes on this section.

Write your answer to each question in the box provided.

- 1** The burning of fossil fuels can produce gases that cause **acid rain**.

Which gas causes acid rain?

- A** Carbon monoxide
- B** Nitrogen
- C** Oxygen
- D** Sulfur dioxide

Your answer

[1]

- 2** The table shows information about four different elements.

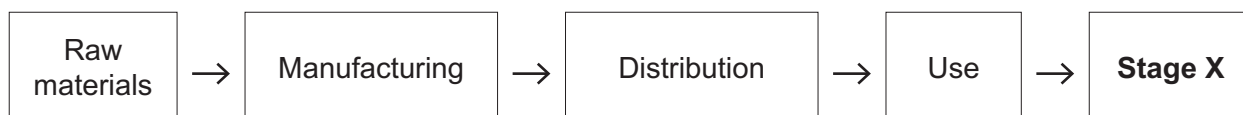
	Description of element at room temperature	Description of reactivity
A	colourless gas	reactive
B	pale yellow gas	very reactive
C	silvery liquid	unreactive
D	shiny solid	very reactive

Which element, **A**, **B**, **C** or **D**, is in Group 7 of the Periodic Table?

Your answer

[1]

- 3 The diagram shows the main stages in a life-cycle assessment of a product.



What is the name of **Stage X**?

- A Disposal
- B Extraction
- C Packaging
- D Production

Your answer

[1]

- 4 The Earth's early atmosphere contained little or no oxygen.

Which process produced the oxygen found in the Earth's atmosphere today?

- A Burning fossil fuels
- B Photosynthesis by plants and algae
- C Respiration by bacteria
- D Volcanic activity

Your answer

[1]

- 5 Which statement about the Group 0 elements is correct?

- A They exist as simple molecules.
- B They exist as single atoms.
- C They react to form giant covalent molecules.
- D They react to form ionic compounds.

Your answer

[1]

- 6 Many scientists believe that increased levels of methane in the atmosphere are contributing to global warming.

What causes increased levels of methane in the atmosphere?

- A Cutting down trees
- B Exhaust gases from car engines
- C Incomplete combustion of fossil fuels
- D Waste gases from cows and landfill sites

Your answer

[1]

- 7 Octane, C₈H₁₈, is a compound in petrol.

Which statement about octane is correct?

- A It is a hydrocarbon with a relative molecular mass of 66.
- B It is a hydrocarbon with the empirical formula C₄H₉.
- C It is extracted from crude oil by filtration.
- D It is in the bitumen fraction of crude oil.

Your answer

[1]

- 8 Sodium reacts with water to form sodium hydroxide and hydrogen.

What is the correctly balanced symbol equation for this reaction?

- A $\text{Na(s)} + \text{H}_2\text{O(l)} \rightarrow \text{NaOH(aq)} + \text{H}_2\text{(g)}$
- B $\text{Na(s)} + 2\text{H}_2\text{O(l)} \rightarrow \text{NaOH(aq)} + 2\text{H}_2\text{(g)}$
- C $2\text{Na(s)} + \text{H}_2\text{O(l)} \rightarrow 2\text{NaOH(aq)} + \text{H}_2\text{(g)}$
- D $2\text{Na(s)} + 2\text{H}_2\text{O(l)} \rightarrow 2\text{NaOH(aq)} + \text{H}_2\text{(g)}$

Your answer

[1]

- 9 A copper ore contains 66.4% copper. The ore is CuS .

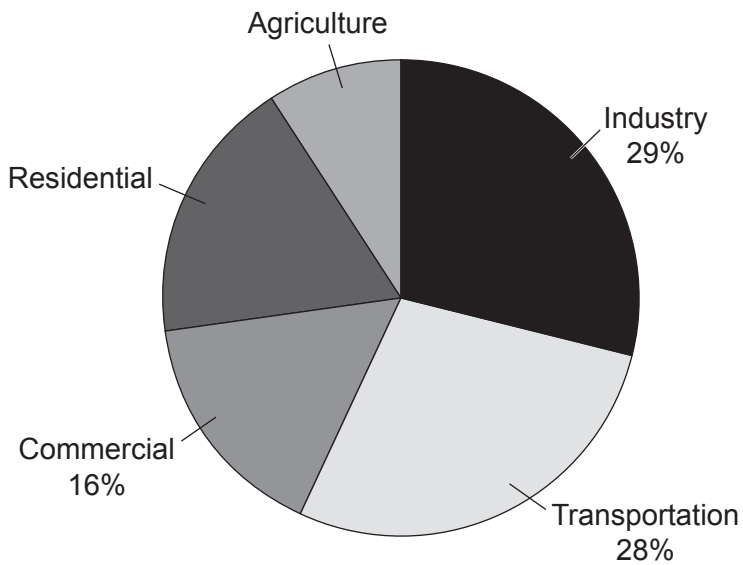
What is the maximum mass of copper that can be extracted from 500 tonnes of the ore?

- A 7.53 tonnes
- B 66.4 tonnes
- C 332 tonnes
- D 33200 tonnes

Your answer

[1]

- 10 The diagram shows the percentage of greenhouse gases made from different sources.



The percentage of greenhouse gases produced from Residential is **twice** that produced from Agriculture.

What is the percentage of greenhouse gases produced from Residential?

- A 9%
- B 18%
- C 27%
- D 36%

Your answer

[1]

SECTION B

Answer **all** the questions.

- 11 In 2010, scientists discovered a new Group 7 element called tennessine. Its symbol is Ts.

The diagram shows where tennessine is placed in Group 7 of the Periodic Table.

F fluorine
Cl chlorine
Br bromine
I iodine
At astatine
Ts tennessine

Use your knowledge of the properties and trends of the Group 7 elements to **predict** the answer to the following questions.

- (a) How many outer shell electrons are there in an atom of tennessine?

Put a **ring** around the correct answer.

1 **7** **17**

[1]

- (b) What is the reactivity of tennessine compared to astatine?

Put a **ring** around the correct answer.

less reactive **more reactive** **the same**

[1]

- (c) What is the physical state of tennessine at room temperature?

Put a **ring** around the correct answer.

gas **liquid** **solid**

[1]

(d) What is the melting point of tennessine compared to astatine?

Put a **ring** around the correct answer.

higher

lower

the same

[1]

12 This question is about the Group 1 metals.

(a) A teacher adds a small piece of a Group 1 metal to a trough of water, as shown in **Fig. 12.1**.

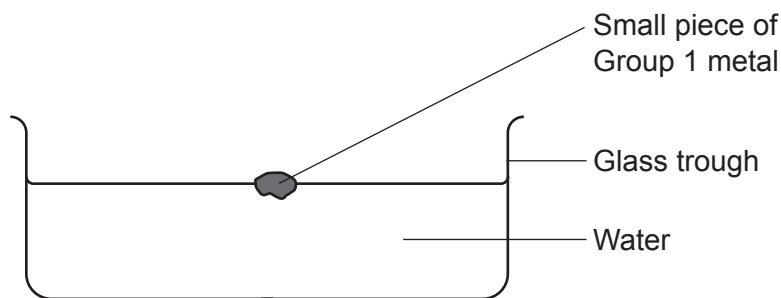


Fig. 12.1

The metal burns with a lilac flame, sparks and explodes.

Which Group 1 metal did the teacher add to the water in **Fig. 12.1**?

Put a **ring** around the correct answer.

lithium sodium potassium rubidium caesium

[1]

(b) Sodium is a soft metal with a dull coating.

It is shiny when it is freshly cut.

After several seconds, the shiny surface goes dull.

(i) Which gas in the air reacts with the sodium as it goes dull?

..... [1]

(ii) What is the name of the chemical compound made as the sodium goes dull?

..... [1]

(iii) How long would it take a piece of freshly cut lithium to go dull compared to sodium?

Give a reason for your answer.

.....

.....

..... [2]

(c) Fig. 12.2 shows the trend in the density of the Group 1 metals from lithium to caesium.

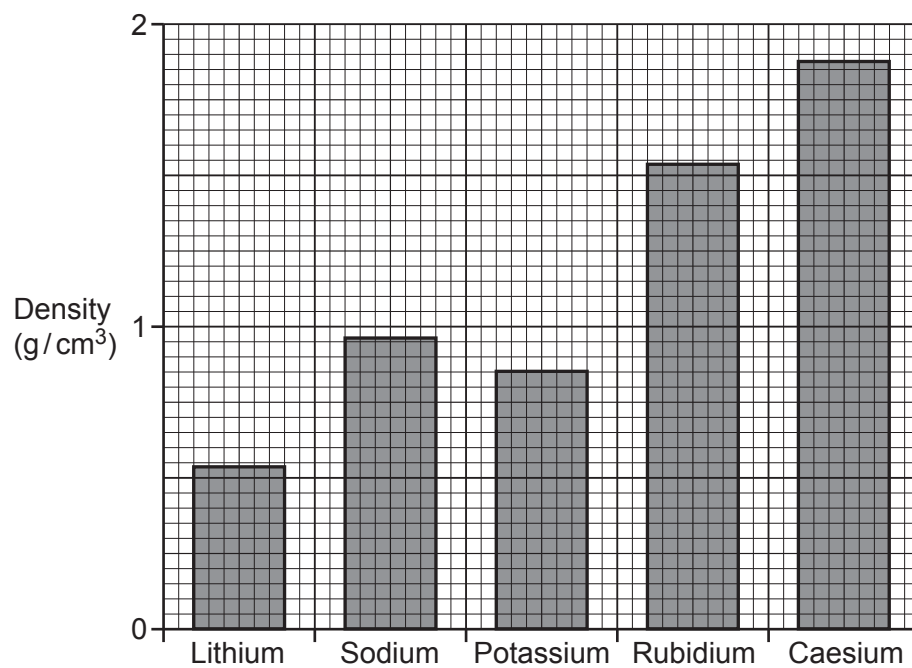


Fig. 12.2

Which Group 1 metal does not fit the general trend?

Give a reason for your answer using information from Fig. 12.2.

.....

.....

..... [2]

13 Crude oil is a mixture of different chemicals called fractions.

(a) What is the name of the process used to separate crude oil into fractions?

..... [1]

(b) **Table 13.1** shows the stages in the separation of crude oil into fractions.

The stages are **not** in the correct order.

Stages in the separation of crude oil into fractions	
W	The vapours are piped into the bottom of the fractionating column.
X	The vapours cool and the fractions condense at different temperatures.
Y	Crude oil is heated and vaporised.
Z	The vapours rise up the column.

Table 13.1

Write **W**, **X**, **Y** and **Z** in the boxes to show the correct order of the stages.

<input type="text"/>	<input type="text"/>	<input type="text"/>	<input type="text"/>
----------------------	----------------------	----------------------	----------------------

[1]

- (c) **Table 13.2** shows information about the different gases in the LPG (liquefied petroleum gas) fraction separated from crude oil.

Gas in the LPG fraction	Formula	Boiling point (°C)
Methane	CH ₄	-162
Ethane	C ₂ H ₆	-89
Propane	C ₃ H ₈	-42
Butane	C ₄ H ₁₀	

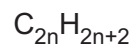
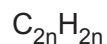
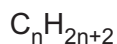
Table 13.2

- (i) Write the name of the homologous series of the gases in the LPG fraction.

..... [1]

- (ii) What is the correct general formula for this homologous series?

Put a (ring) around the correct answer.

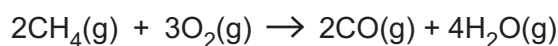


[1]

- (iii) Use the data in **Table 13.2** to estimate the boiling point of butane.

Estimated boiling point = °C [1]

- (d) The equation shows the reaction for methane burning in a limited amount of oxygen.



- (i) Write down the name of the hazardous gas formed in this reaction.

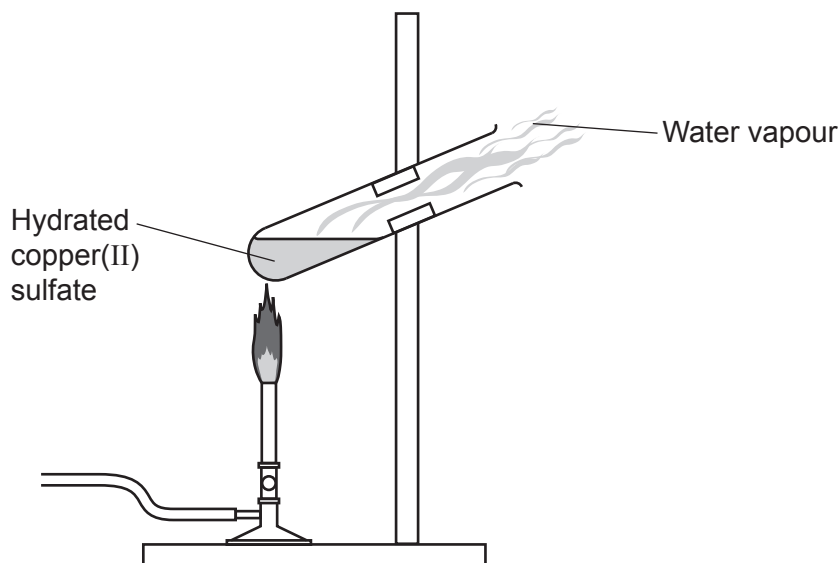
..... [1]

- (ii) State why the gas identified in (d)(i) is hazardous to humans.

..... [1]

14 A student investigates heating hydrated copper(II) sulfate, $\text{CuSO}_4 \cdot 5\text{H}_2\text{O}$.

The diagram shows the experiment they do.



The student:

- Measures the mass of a boiling tube.
- Puts about 5 g of hydrated copper(II) sulfate in the boiling tube and measures the mass.
- Gently heats the boiling tube for one minute.
- Lets the boiling tube cool down and measures the mass.

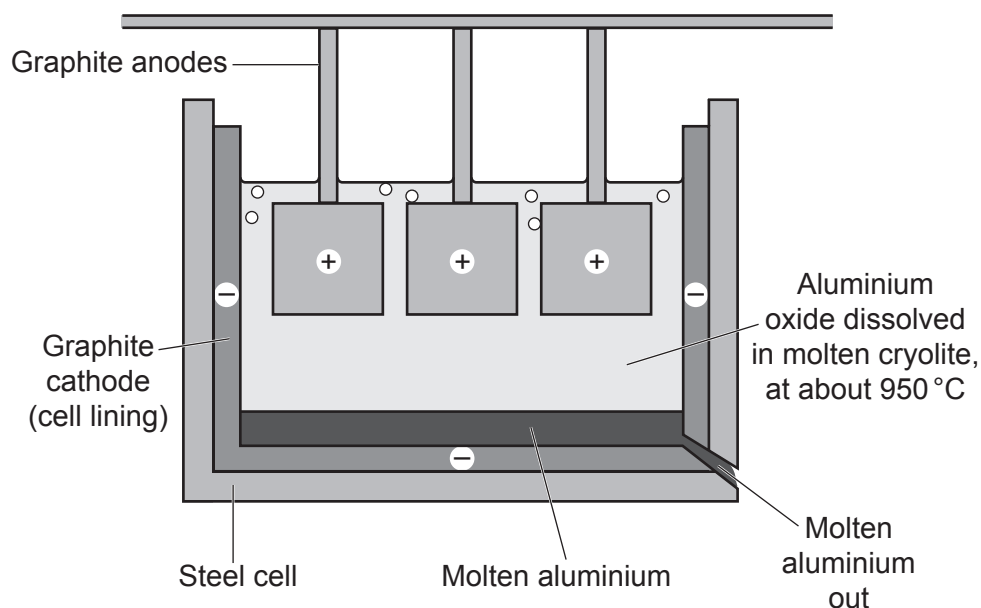
During the experiment the hydrated copper(II) sulfate turns from blue to white and water vapour is produced.

Look at the student's results.

Mass of boiling tube (g)	69.1
Mass of boiling tube and copper(II) sulfate before heating (g)	74.2
Mass of boiling tube and copper(II) sulfate after heating (g)	73.4

15 Aluminium is produced from aluminium oxide by electrolysis.

The diagram shows the industrial electrolysis of aluminium oxide.



(a) Look at the equation for the electrolysis of aluminium oxide.



Complete the balanced symbol equation for the reaction.

[2]

(b) Molten aluminium oxide contains Al^{3+} and O^{2-} ions.

(i) Explain why the aluminium oxide must be molten during electrolysis.

.....

 [2]

(ii) Explain why aluminium is produced at the cathode.

..... [1]

(c) Aluminium melts at 650 °C.

Describe **two** reasons why it is cheaper to recycle aluminium than to produce it from electrolysis.

Reason 1

.....

.....

Reason 2

.....

.....

[2]

16* Fig. 16.1 shows how the atmospheric carbon dioxide concentration changed between 1970 and 2010.

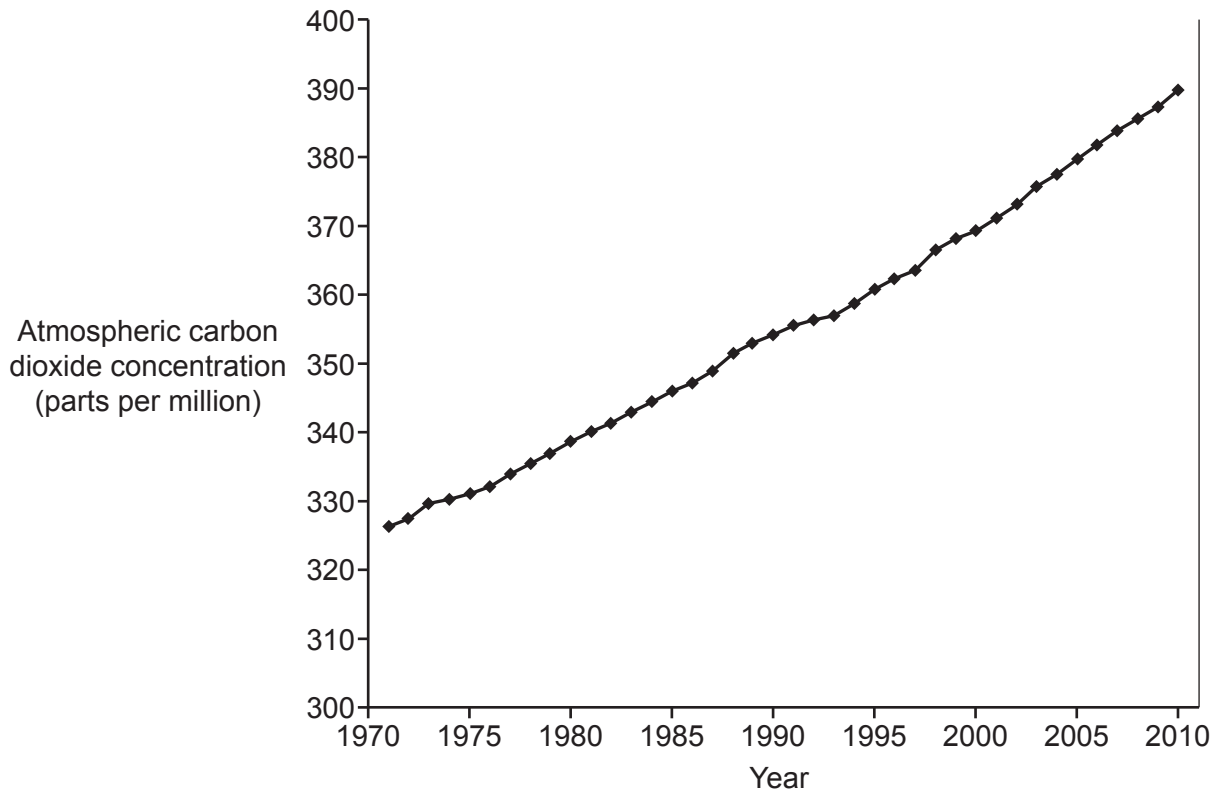


Fig. 16.1

Fig. 16.2 shows how the global consumption of fossil fuels changed between 1990 and 2010.

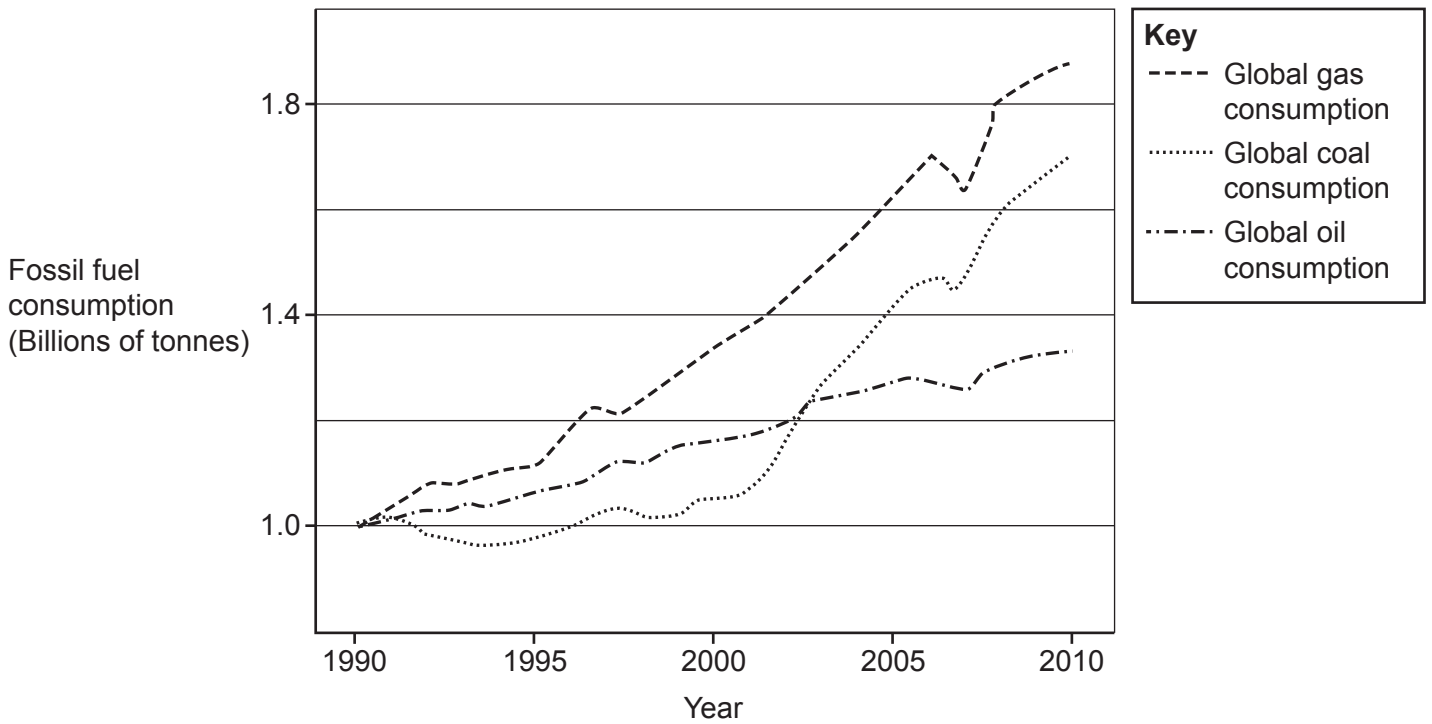
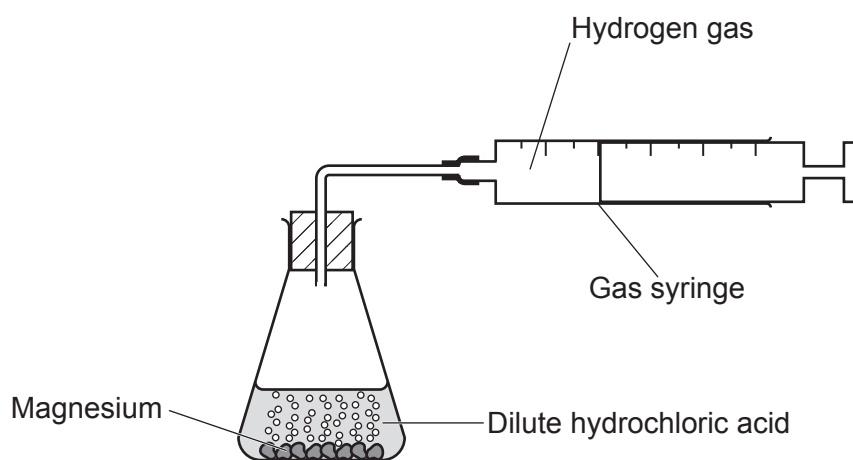


Fig. 16.2

- 17 A student investigates the rate of reaction between magnesium and an **excess** of dilute hydrochloric acid.

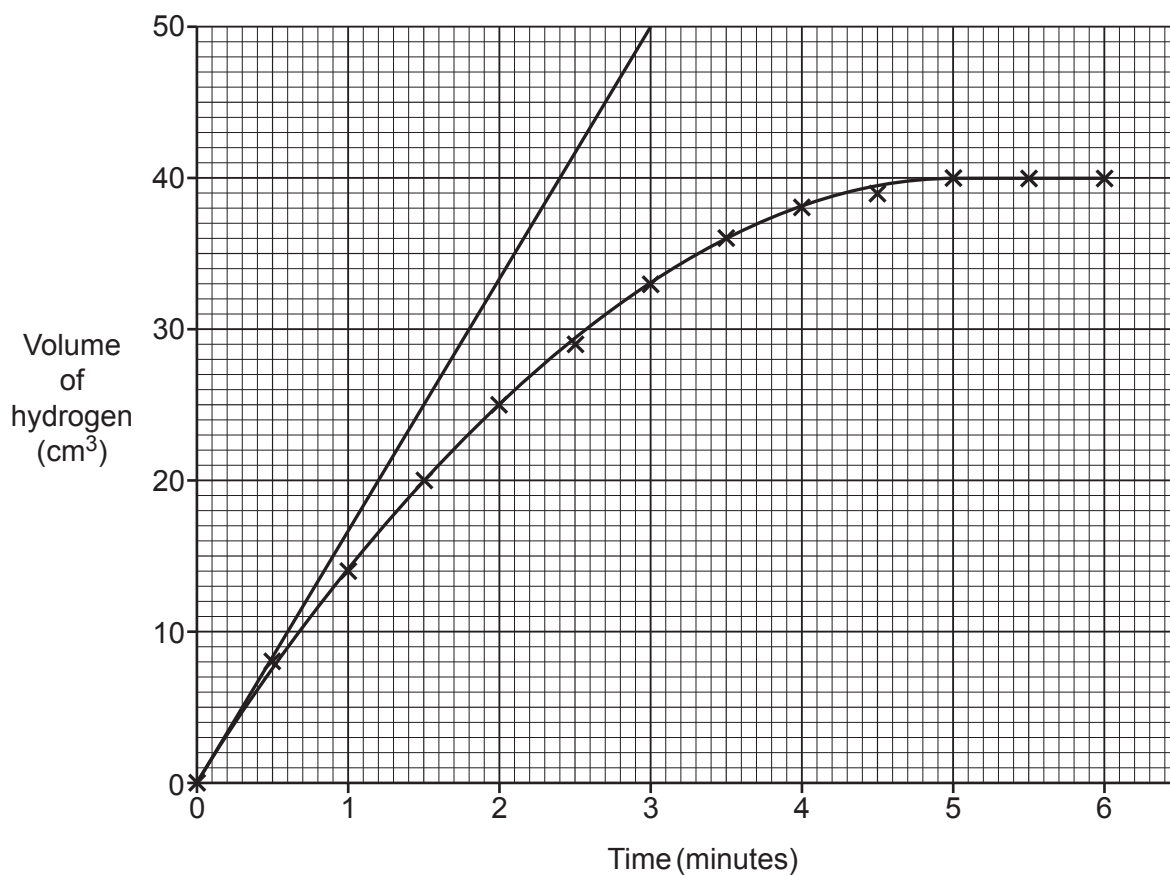
The diagram shows the equipment they use.



The student measures the total volume of hydrogen gas produced every 30 seconds.

The student plots a graph of their results.

They want to calculate the rate of reaction at the start of the reaction. They draw a tangent on the graph at the start of the reaction.



- (a) The gradient of the tangent gives the rate of reaction. Use the tangent to calculate the rate of reaction at the start of the reaction.

Give your answer to **1** decimal place.

Rate of reaction = $\text{cm}^3 / \text{minute}$ [3]

- (b) What happens to the **rate of reaction** as the reaction progresses?

Explain your answer using ideas about particles and collisions.

.....

.....

.....

..... [3]

- (c) Another student repeats the experiment.

They increase the concentration of the dilute hydrochloric acid. They keep everything else in the experiment the same.

- (i) Does the gradient of the graph at the start of this student's reaction decrease, increase or stay the same compared to the first student's experiment?

Tick (✓) **one** box.

Decrease

Increase

Stay the same

Give a reason for your answer.

.....

..... [1]

- (ii) Write down the volume of hydrogen gas that is produced at the end of this reaction.

Volume = cm^3 [1]

ADDITIONAL ANSWER SPACE

If additional space is required, you should use the following lined page(s). The question number(s) must be clearly shown in the margin(s).

A large area of lined paper for writing. It features a vertical solid line on the left side, creating a margin. The rest of the page is filled with horizontal dotted lines, providing space for writing answers.

A large rectangular area consisting of a solid vertical line on the left side and horizontal dotted lines extending across the page, forming a template for writing.

A large rectangular area with a solid vertical line on the left side and horizontal dotted lines extending across the page, providing a space for writing answers.



Copyright Information

OCR is committed to seeking permission to reproduce all third-party content that it uses in its assessment materials. OCR has attempted to identify and contact all copyright holders whose work is used in this paper. To avoid the issue of disclosure of answer-related information to candidates, all copyright acknowledgements are reproduced in the OCR Copyright Acknowledgements Booklet. This is produced for each series of examinations and is freely available to download from our public website (www.ocr.org.uk) after the live examination series. If OCR has unwittingly failed to correctly acknowledge or clear any third-party content in this assessment material, OCR will be happy to correct its mistake at the earliest possible opportunity.

For queries or further information please contact The OCR Copyright Team, The Triangle Building, Shaftesbury Road, Cambridge CB2 8EA.

OCR is part of the Cambridge Assessment Group; Cambridge Assessment is the brand name of University of Cambridge Local Examinations Syndicate (UCLES), which is itself a department of the University of Cambridge.